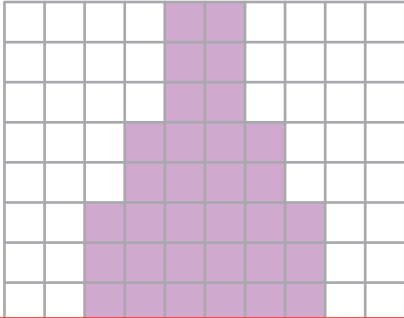


Counting Squares

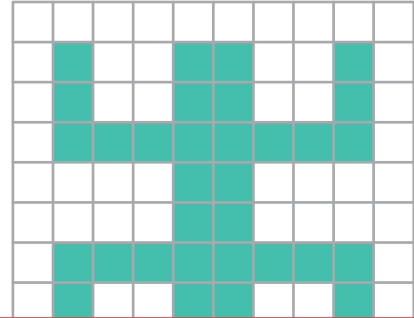
Find the area of the shaded region in each grid.

$\square = 1$ square unit

1)



2)



3)


Preview

Become a member to unlock
unrestricted access to both printable
and online worksheets.

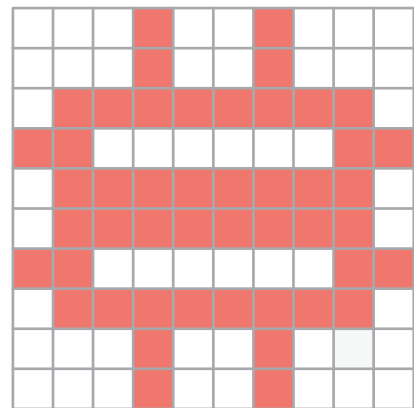


www.tutoringhour.com

5)



6)



Area = _____ square units

Area = _____ square units