
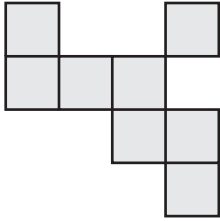


Counting Squares

Calculate the area of each shape by counting the squares.

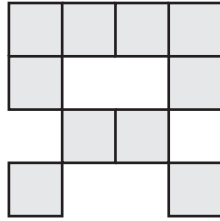
 = 1 ft²

1)



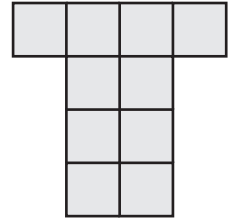
Area = _____ ft²

2)



Area = _____ ft²

3)



Area = _____ ft²

4)

Preview

Become a member to unlock
unrestricted access to both printable
and online worksheets.



www.tutoringhour.com

Area = _____ ft²


7)

Area = _____ ft²

Area = _____ ft²

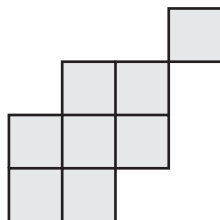
Area = _____ ft²

10)



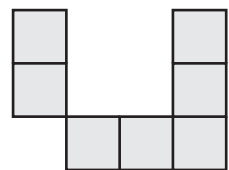
Area = _____ ft²

11)



Area = _____ ft²

12)



Area = _____ ft²