
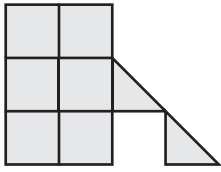


# Counting Squares

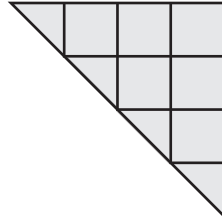
Calculate the area of each shape by counting the squares.

 = 1 in<sup>2</sup>

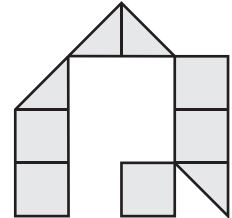
1)



2)



3)



Area = \_\_\_\_\_ in<sup>2</sup>

Area = \_\_\_\_\_ in<sup>2</sup>

Area = \_\_\_\_\_ in<sup>2</sup>

Area = \_\_\_\_\_ in<sup>2</sup>

4)

# Preview

Become a member to unlock  
unrestricted access to both printable  
and online worksheets.



[www.tutoringhour.com](http://www.tutoringhour.com)

Area = \_\_\_\_\_ in<sup>2</sup>

Area = \_\_\_\_\_ in<sup>2</sup>

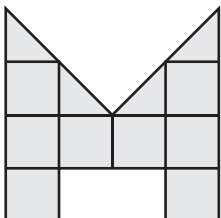
7)

Area = \_\_\_\_\_ in<sup>2</sup>

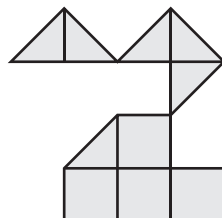
Area = \_\_\_\_\_ in<sup>2</sup>

Area = \_\_\_\_\_ in<sup>2</sup>

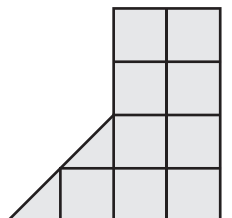
10)



11)



12)



Area = \_\_\_\_\_ in<sup>2</sup>

Area = \_\_\_\_\_ in<sup>2</sup>

Area = \_\_\_\_\_ in<sup>2</sup>