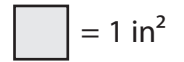


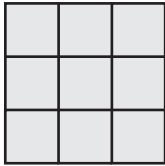
Counting Squares

Answer Key

Calculate the area of each shape by counting the squares.




1)



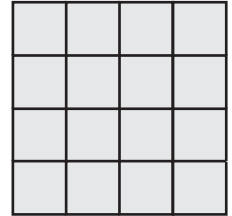
Area = 9 in²

2)



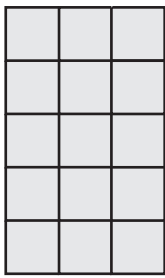
Area = 20 in²

3)



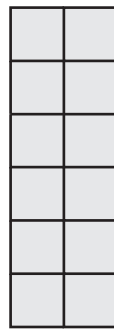
Area = 16 in²

4)




Area = 15 in²

5)




Area = 12 in²

6)



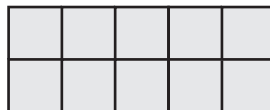
Area = 24 in²

7)



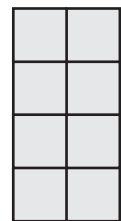
Area = 30 in²

8)




Area = 10 in²

9)



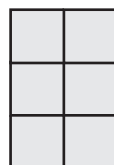
Area = 8 in²

10)




Area = 18 in²

11)



Area = 6 in²

12)



Area = 12 in²