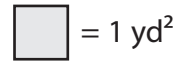


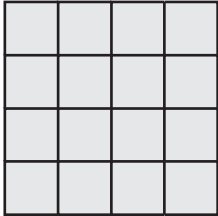
Counting Squares

Answer Key

Calculate the area of each shape by counting the squares.

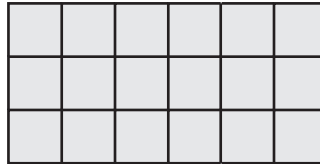


1)



Area = 16 yd²

2)



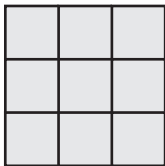
Area = 18 yd²

3)




Area = 5 yd²

4)




Area = 9 yd²

5)




Area = 25 yd²

6)




Area = 30 yd²

7)



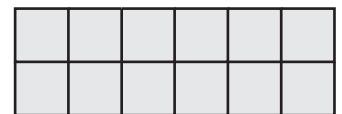
Area = 20 yd²

8)



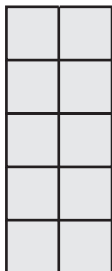
Area = 6 yd²

9)



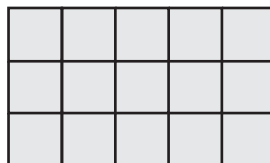
Area = 12 yd²

10)




Area = 10 yd²

11)



Area = 15 yd²

12)



Area = 24 yd²