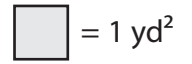
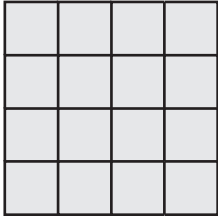


Counting Squares

Calculate the area of each shape by counting the squares.

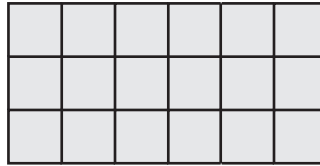


1)



Area = _____

2)



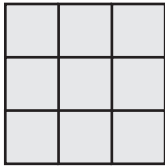
Area = _____

3)




Area = _____

4)




Area = _____

5)




Area = _____

6)



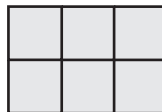
Area = _____

7)



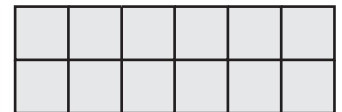
Area = _____

8)



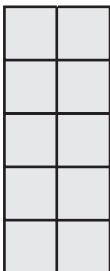
Area = _____

9)



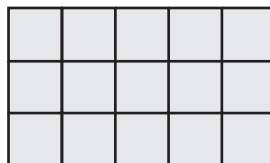
Area = _____

10)




Area = _____

11)



Area = _____

12)



Area = _____