

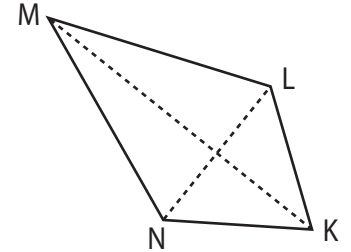
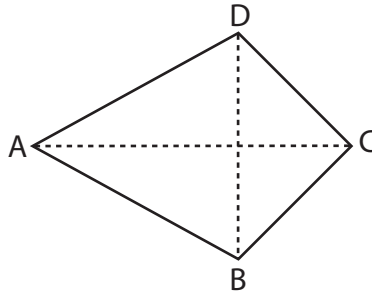
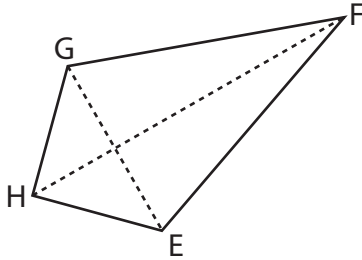
# Area of a Kite

Find the area of each kite.

1)  $GE = 3.6$  yd,  $HF = 11.2$  yd

2)  $AC = 9.4$  ft,  $BD = 6.3$  ft

3)  $MK = 13.3$  in,  $NL = 4.2$  in



## Preview

Become a member to unlock  
unrestricted access to both printable  
and online worksheets.

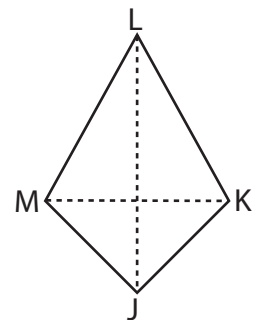
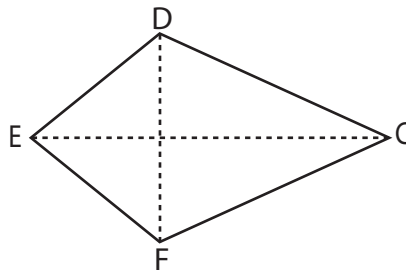
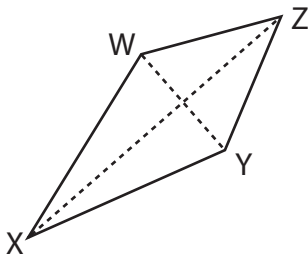


[www.tutoringhour.com](http://www.tutoringhour.com)

7)  $WY = 4.8$  in,  $XZ = 12.7$  in

8)  $EC = 14.1$  yd,  $FD = 9.2$  yd

9)  $MK = 3.5$  ft,  $JL = 7.2$  ft



Area = \_\_\_\_\_

Area = \_\_\_\_\_

Area = \_\_\_\_\_