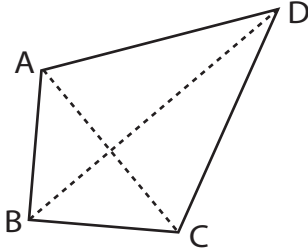


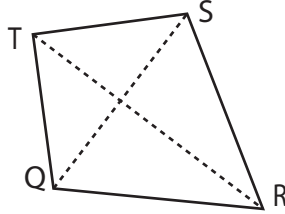
Area of a Kite

Find the area of each kite.

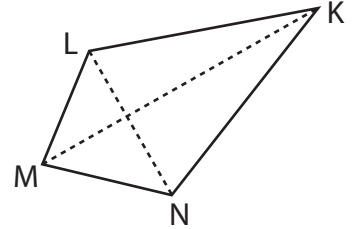
1)



2)



3)



4)

Ar

Preview

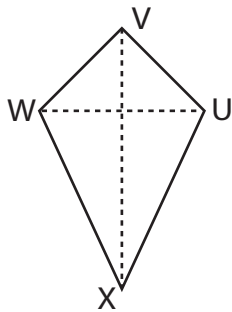
Become a member to unlock
unrestricted access to both printable
and online worksheets.



www.tutoringhour.com

Ar

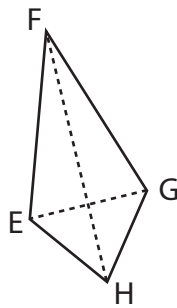
7)



$VX = 17$ yd, $WU = 8$ yd

Area = _____

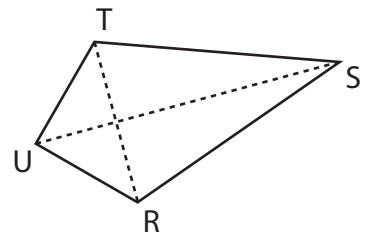
8)



$HF = 13$ ft, $EG = 4$ ft

Area = _____

9)



$US = 11$ in, $TR = 6$ in

Area = _____