

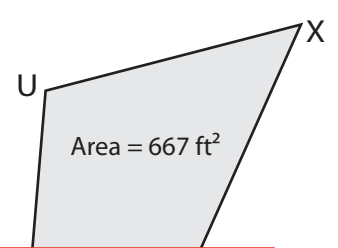
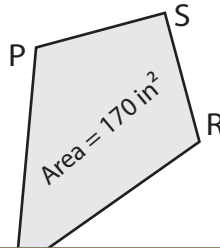
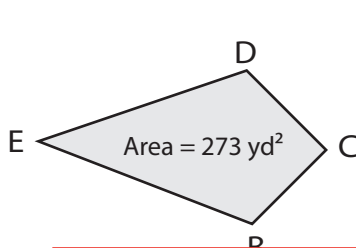
Kite | Missing Diagonal

Find the length of the missing diagonal in each kite.

1) Find BD if $EC = 26$ yd.

2) Find PR if $QS = 34$ in.

3) Find VX if $UW = 29$ ft.



Preview

Become a member to unlock
unrestricted access to both printable
and online worksheets.

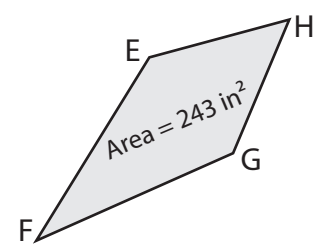
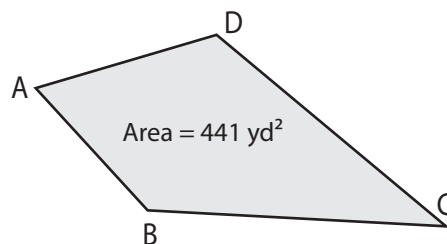
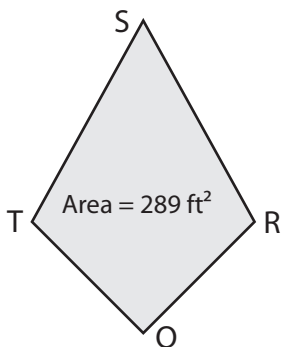


www.tutoringhour.com

4) Find TR if $QS = 34$ ft.

5) Find AC if $BD = 18$ yd.

6) Find EG if $FH = 36$ in.



TR = _____

AC = _____

EG = _____