

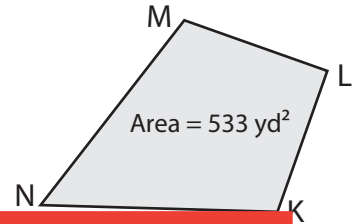
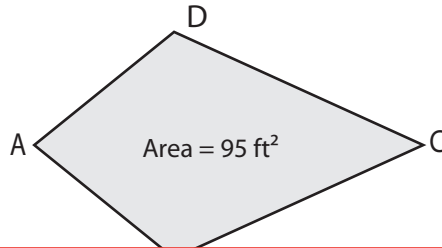
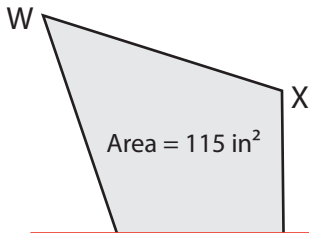
Kite | Missing Diagonal

Find the length of the missing diagonal in each kite.

1) Find WU if VX = 5 in.

2) Find AC if BD = 10 ft.

3) Find NL if MK = 26 yd.



Preview

Become a member to unlock
unrestricted access to both printable
and online worksheets.

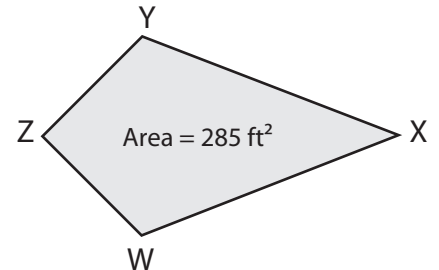
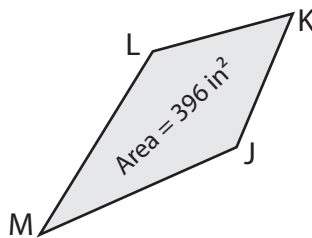
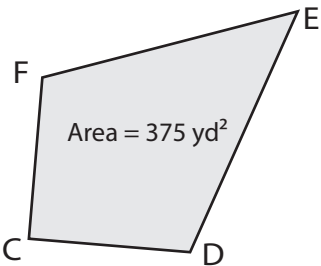


www.tutoringhour.com

4) Find FD if CE = 30 yd.

5) Find MK if LJ = 22 in.

6) Find WY if XZ = 38 ft.



FD = _____

MK = _____

WY = _____