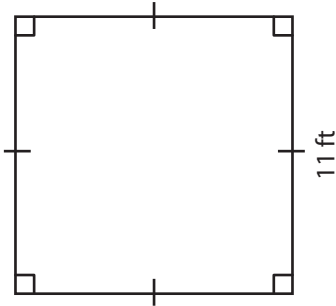


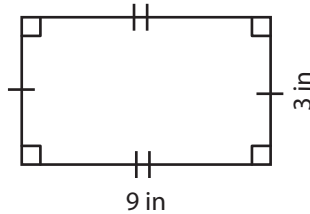
# Area of Mixed Shapes

Find the area of each shape. (use  $\pi = 3.14$ )

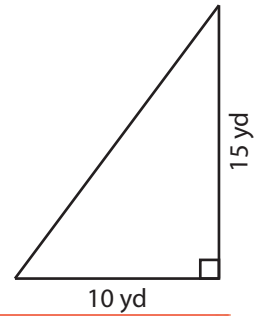
1)



2)



3)



4)

Ar

# Preview

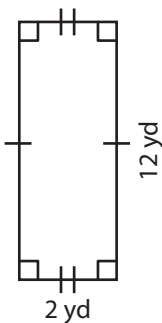
Become a member to unlock  
unrestricted access to both printable  
and online worksheets.



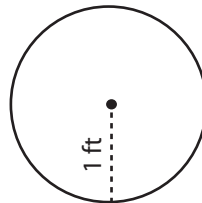
Ar

[www.tutoringhour.com](http://www.tutoringhour.com)

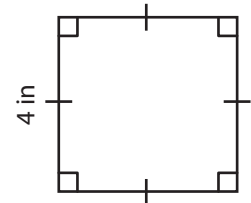
7)



8)



9)



Area = \_\_\_\_\_

Area = \_\_\_\_\_

Area = \_\_\_\_\_