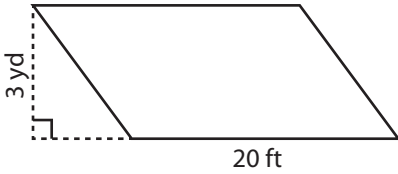


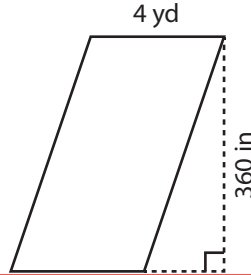
# Area of a Parallelogram

Find the area of each parallelogram.

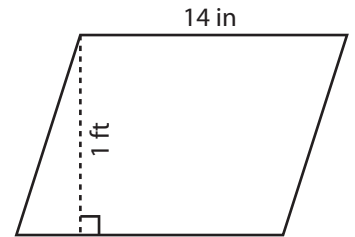
1)



2)



3)



4)

Ar

# Preview

in<sup>2</sup>

Become a member to unlock  
unrestricted access to both printable  
and online worksheets.

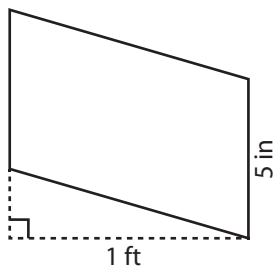


Ar

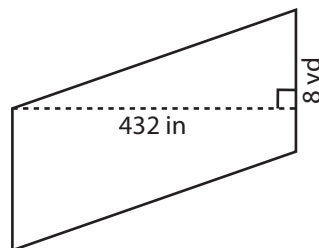
in<sup>2</sup>

www.tutoringhour.com

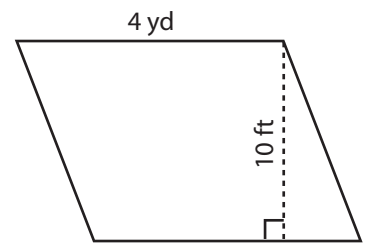
7)



8)



9)



Area = \_\_\_\_\_ in<sup>2</sup>

Area = \_\_\_\_\_ yd<sup>2</sup>

Area = \_\_\_\_\_ ft<sup>2</sup>