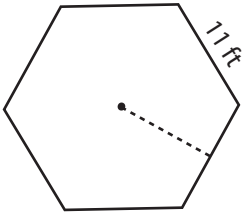


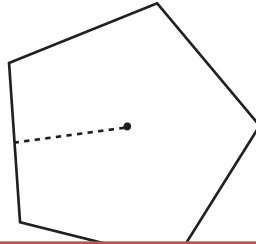
# Polygon | Apothem

Find the perimeter and apothem of each polygon. Round your answer to two decimal places.

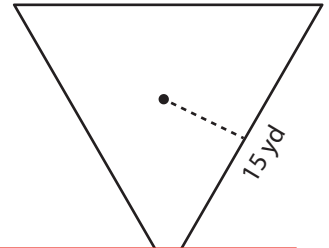
1)



2)



3)



Per

Apo

# Preview

4)

Become a member to unlock  
unrestricted access to both printable  
and online worksheets.

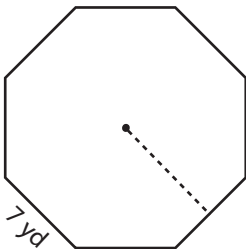


Per

Apo

[www.tutoringhour.com](http://www.tutoringhour.com)

7)

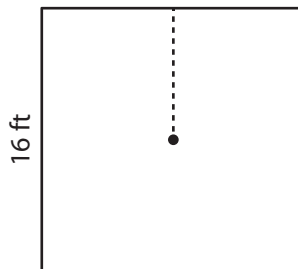


Area: 236.73 yd<sup>2</sup>

Perimeter: \_\_\_\_\_

Apothem: \_\_\_\_\_

8)

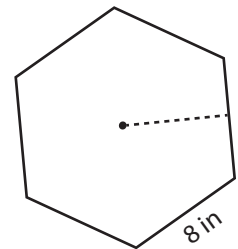


Area: 256 ft<sup>2</sup>

Perimeter: \_\_\_\_\_

Apothem: \_\_\_\_\_

9)



Area: 166.38 in<sup>2</sup>

Perimeter: \_\_\_\_\_

Apothem: \_\_\_\_\_