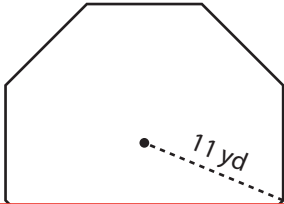


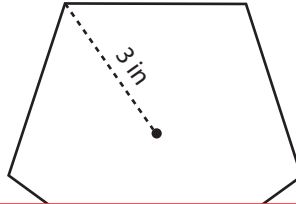
# Area of a Polygon

Find the area of each polygon using the given circumradius. Round your answer to two decimal places.

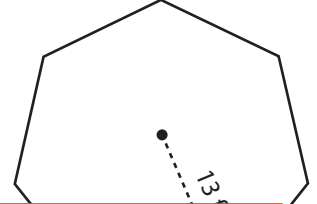
1)



2)



3)



4)

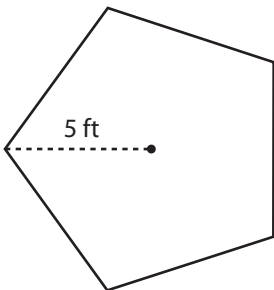
# Preview

Become a member to unlock  
unrestricted access to both printable  
and online worksheets.

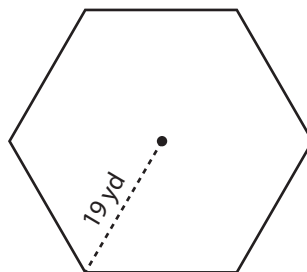


[www.tutoringhour.com](http://www.tutoringhour.com)

7)



8)



9)

