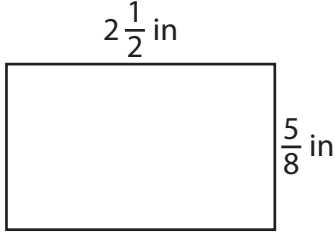


Rectangles | Area and Perimeter

Find the area and perimeter of each rectangle.

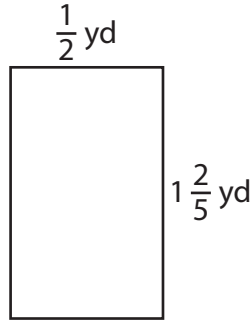
1)



Area = _____

Perimeter = _____

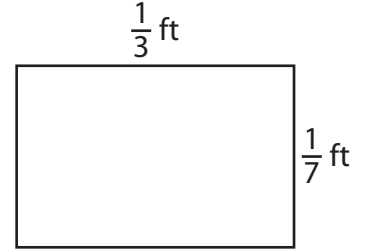
2)



Area = _____

Perimeter = _____

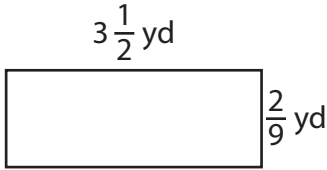
3)



Area = _____

Perimeter = _____

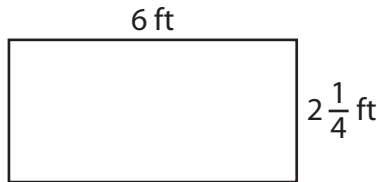
4)



Area = _____

Perimeter = _____

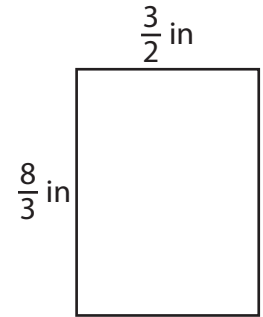
5)



Area = _____

Perimeter = _____

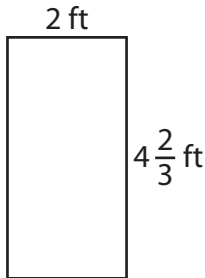
6)



Area = _____

Perimeter = _____

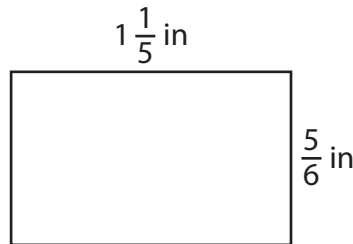
7)



Area = _____

Perimeter = _____

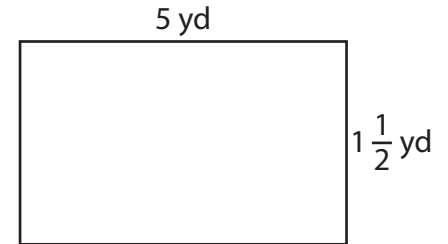
8)



Area = _____

Perimeter = _____

9)



Area = _____

Perimeter = _____