


Rectangles | Area and Perimeter

Find the area and perimeter of each rectangle.

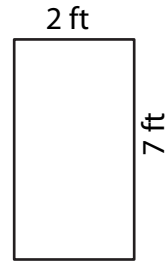
1)



Area = _____

Perimeter = _____

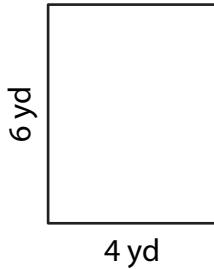
2)



Area = _____

Perimeter = _____

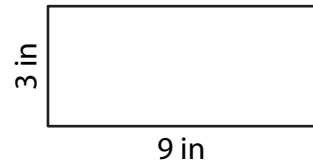
3)



Area = _____

Perimeter = _____

4)



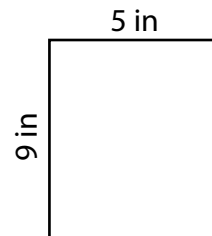
Area = _____

Perimeter = _____

- 5) In a classroom, each student is given a rectangular piece of paper to create flags. If the paper measures 9 inches by 5 inches, what is the area and perimeter of each student's flag?

Area = _____

Perimeter = _____



- 6) A bookshelf has a length of 8 feet and a width of 4 feet. What is the total area and perimeter of bookshelf?

Area = _____

Perimeter = _____

