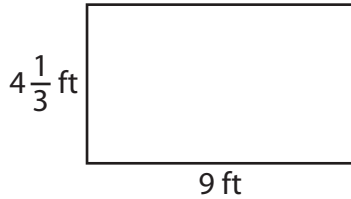


Area of a Rectangle | Fractions

Answer Key

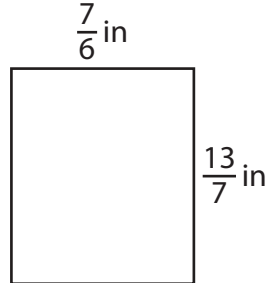
Find the area of each rectangle.

1)



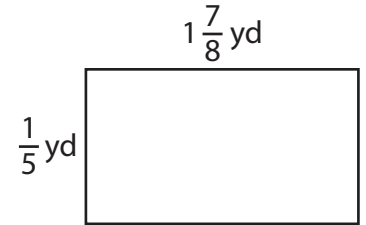
Area = 39 ft^2

2)



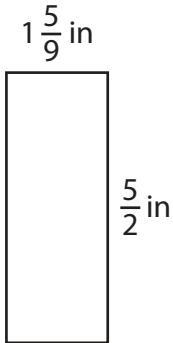
Area = $\frac{13}{6}$ or $2\frac{1}{6}\text{ in}^2$

3)



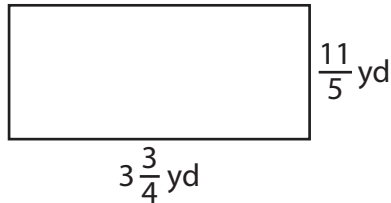
Area = $\frac{3}{8}\text{ yd}^2$

4)



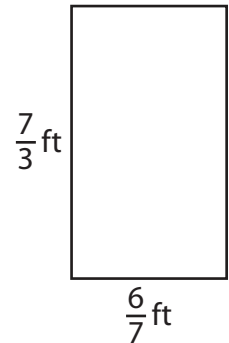
Area = $\frac{35}{9}$ or $3\frac{8}{9}\text{ in}^2$

5)



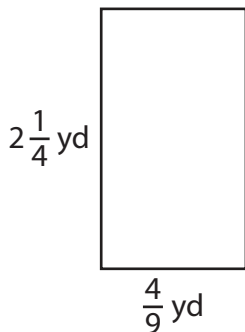
Area = $\frac{33}{4}$ or $8\frac{1}{4}\text{ yd}^2$

6)



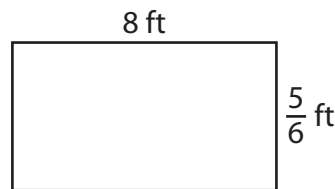
Area = 2 ft^2

7)



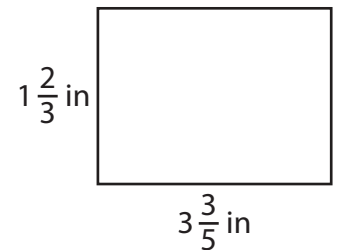
Area = 1 yd^2

8)



Area = $\frac{20}{3}$ or $6\frac{2}{3}\text{ ft}^2$

9)



Area = 6 in^2