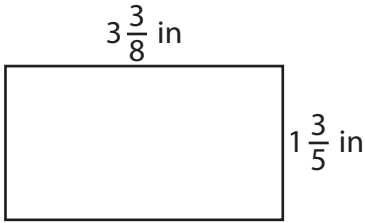


Area of a Rectangle | Fractions

Answer Key

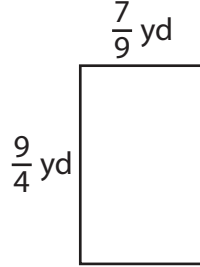
Find the area of each rectangle.

1)



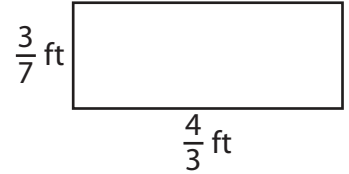
Area = $\frac{27}{5}$ or $5\frac{2}{5}$ in²

2)



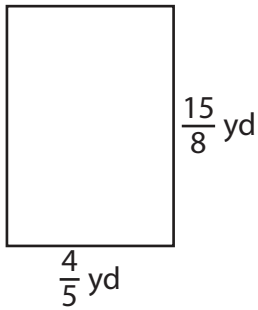
Area = $\frac{7}{4}$ or $1\frac{3}{4}$ yd²

3)



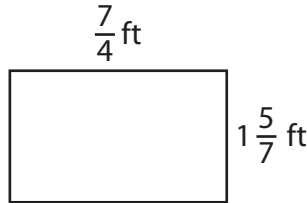
Area = $\frac{4}{7}$ ft²

4)



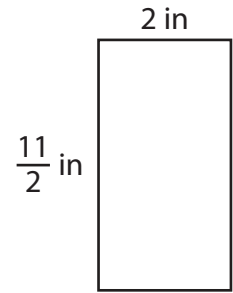
Area = $\frac{3}{2}$ or $1\frac{1}{2}$ yd²

5)



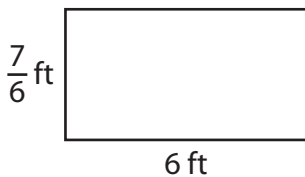
Area = 3 ft²

6)



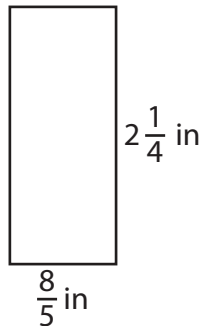
Area = 11 in²

7)



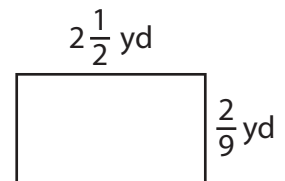
Area = 7 ft²

8)



Area = $\frac{18}{5}$ or $3\frac{3}{5}$ in²

9)



Area = $\frac{5}{9}$ yd²