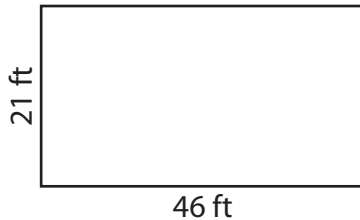


Area of a Rectangle

Find the area of each rectangle.

1)



2)



3)



4)

Ar

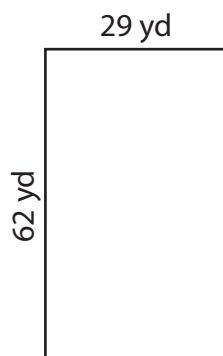
Preview

Become a member to unlock
unrestricted access to both printable
and online worksheets.

Ar

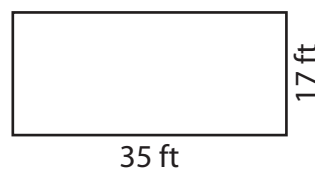
www.tutoringhour.com

7)



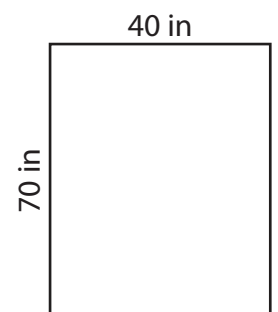
Area = _____

8)



Area = _____

9)



Area = _____