

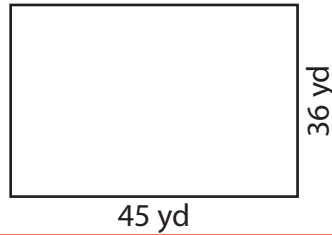
Area of a Rectangle

Find the area of each rectangle.

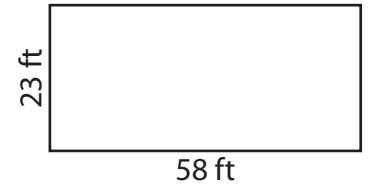
1)



2)



3)



Ar

Preview

4)

Become a member to unlock
unrestricted access to both printable
and online worksheets.

Ar


www.tutoringhour.com



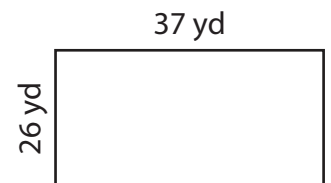
7)



8)



9)



Area = _____

Area = _____

Area = _____