

Area of a Rectangle

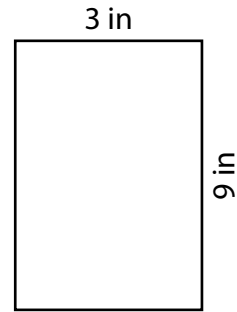
Find the area of each rectangle.

1)



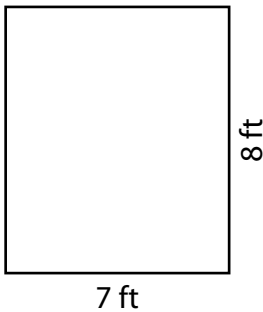
Area = _____

2)



Area = _____

3)



Area = _____

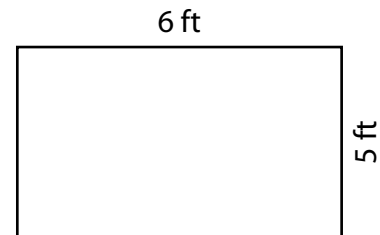
4)



Area = _____

5) A rectangular rug measures 6 feet in length and 5 feet in width. What is its area?

_____ 16 square inc

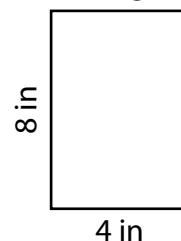


6) Calculate the areas of rectangles A and B, then compare them to determine which one has a larger area.

Area of rectangle A = _____

Area of rectangle B = _____

Rectangle A



Rectangle B



Which rectangle has a larger area?

Rectangle A

Rectangle B