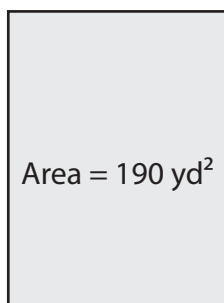


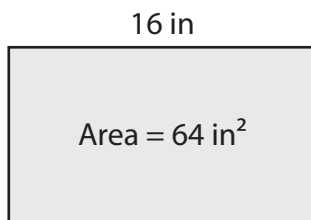
# Finding the Length or Width

Find the length or width of each rectangle.

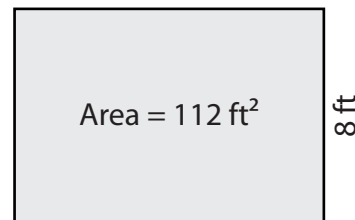
1)



2)



3)



Leng

# Preview

4)



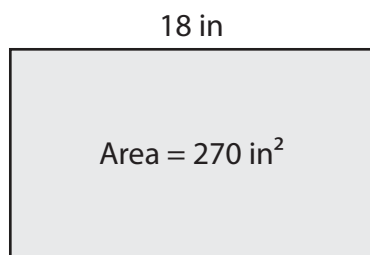
Become a member to unlock  
unrestricted access to both printable  
and online worksheets.

Leng

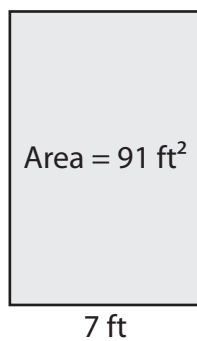
[www.tutoringhour.com](http://www.tutoringhour.com)



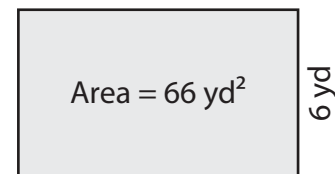
7)



8)



9)



Width = \_\_\_\_\_

Length = \_\_\_\_\_

Length = \_\_\_\_\_