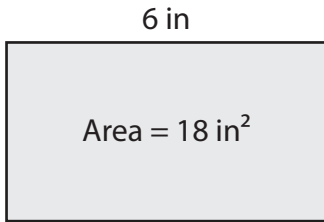


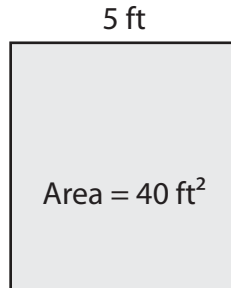
Finding the Length or Width

Find the length or width of each rectangle.

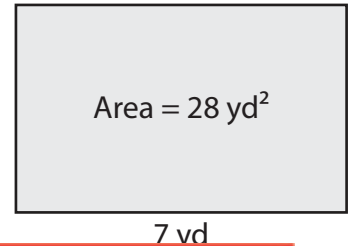
1)



2)



3)



Wid

Preview

4)

Become a member to unlock
unrestricted access to both printable
and online worksheets.

Leng

www.tutoringhour.com

- 7) The area of a picture frame is 42 square inches. If its length is 7 inches, what is the width of the frame?

