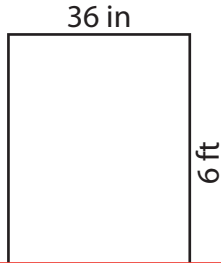


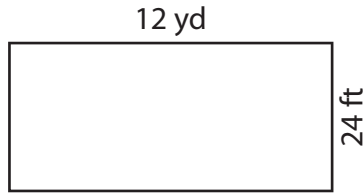
Area of a Rectangle

Find the area of each rectangle.

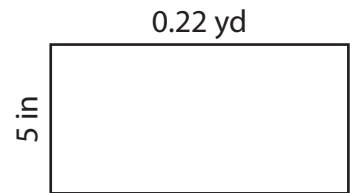
1)



2)



3)



Area =

Preview

in²

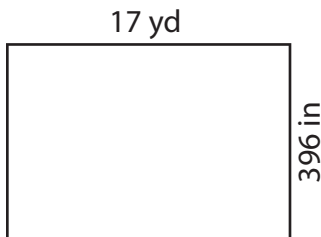
4)

Become a member to unlock
unrestricted access to both printable
and online worksheets.


Area =

yd²

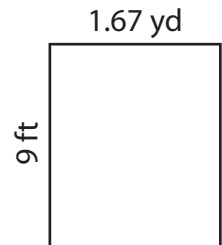
7)

Area = _____ yd²

8)

Area = _____ in²

9)

Area = _____ ft²