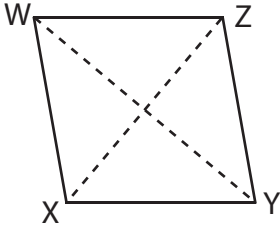


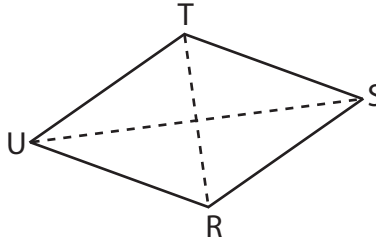
Area of a Rhombus

Find the area of each rhombus.

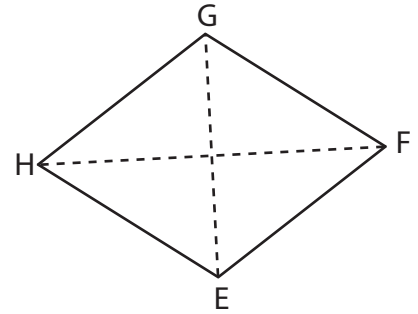
1)



2)



3)



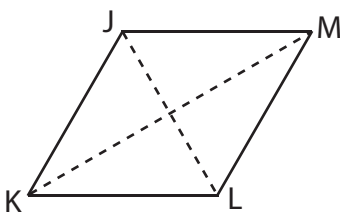
4)

Preview

Become a member to unlock
unrestricted access to both printable
and online worksheets.

www.tutoringhour.com

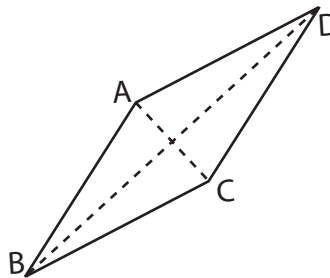
7)



$JL = 12 \text{ ft}$, $KM = 20 \text{ ft}$

Area = _____

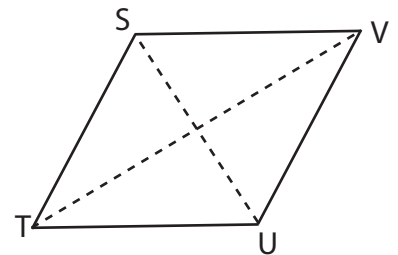
8)



$AC = 9 \text{ in}$, $BD = 17 \text{ in}$

Area = _____

9)



$SU = 4 \text{ yd}$, $TV = 10 \text{ yd}$

Area = _____