

Area of a Square

Answer Key

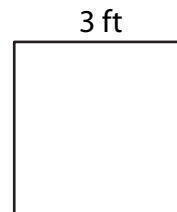
Find the area of each square.

1)




Area = 81 in²

2)




Area = 9 ft²

3)



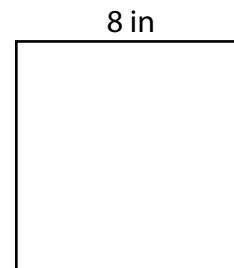
Area = 16 yd²

4)



Area = 36 in²

5) Selena knits a scarf in the shape of a square. If each side measures 8 inches, what is the area of the scarf?



64 square inches

6) David wants to paint a square wall with each side measuring 7 feet. What is the area of the wall?



49 square feet