


Area of a Square

Find the area of each square.

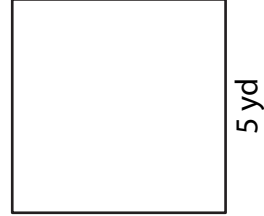
1)



7 ft

Area = _____

2)



5 yd

Area = _____

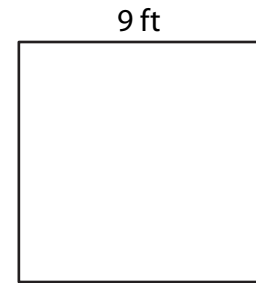
3)



3 in

Area = _____

4)



9 ft


Area = _____

-
- 5) Mark designs a logo in the shape of a square with each side measuring 6 inches. What is the area of the logo?



6 in

- 6) John is cutting a piece of fabric in the shape of a square. If each side measures 2 yards, what is the area of the fabric?



2 yd
