


Area of a Square

Answer Key

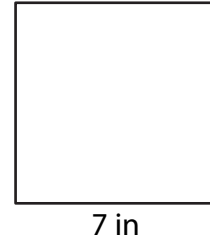
Find the area of each square.

1)



Area = 9 yd²

2)



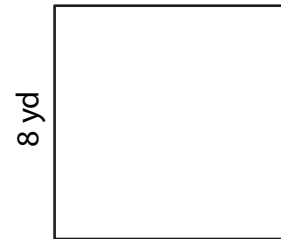
Area = 49 in²

3)




Area = 36 ft²

4)



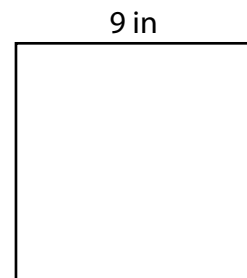
Area = 64 yd²

5) Tony is laying tiles in a square bathroom with each side measuring 5 feet. What is the total area of the floor that needs tiling?



25 square feet

6) Julia is making a quilt with square patches, where each side measures 9 inches. What is the area of each patch?



81 square inches