



Area and Perimeter of a Square

Find the area and perimeter of each square.


1) $\frac{3}{4}$ ft



2) $\frac{9}{2}$ in



3) $\frac{2}{5}$ yd



Preview

Become a member to unlock
unrestricted access to both printable
and online worksheets.



www.tutoringhour.com


7)

$2\frac{1}{2}$ yd



8)

$\frac{4}{9}$ ft



9)

$\frac{6}{7}$ in



Area = _____

Area = _____

Area = _____

Perimeter = _____

Perimeter = _____

Perimeter = _____