


# Area and Perimeter of a Square

---

Find the area and perimeter of each square.

1)

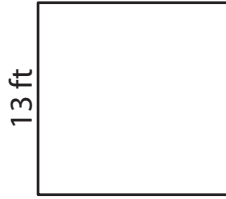


18 yd

Area = \_\_\_\_\_

Perimeter = \_\_\_\_\_

2)




13 ft

Area = \_\_\_\_\_

Perimeter = \_\_\_\_\_

3)

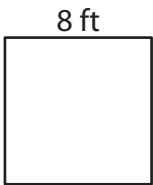


26 in

Area = \_\_\_\_\_

Perimeter = \_\_\_\_\_

4)




8 ft

Area = \_\_\_\_\_

Perimeter = \_\_\_\_\_

5)




17 in

Area = \_\_\_\_\_

Perimeter = \_\_\_\_\_

6)




21 yd

Area = \_\_\_\_\_

Perimeter = \_\_\_\_\_

7)




2 in

Area = \_\_\_\_\_

Perimeter = \_\_\_\_\_

8)




20 yd

Area = \_\_\_\_\_

Perimeter = \_\_\_\_\_

9)



23 ft

Area = \_\_\_\_\_

Perimeter = \_\_\_\_\_