


Area of a Square

Find the area of each square.

1)



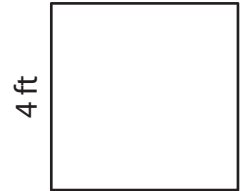
10 in

2)



3 yd

3)



4 ft

4)

Ar

Preview


Become a member to unlock
unrestricted access to both printable
and online worksheets.



Ar

www.tutoringhour.com

7)




11 ft

8)



20 in

9)



12 yd

Area = _____

Area = _____

Area = _____