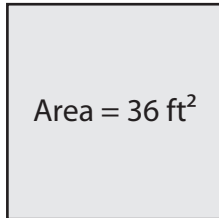


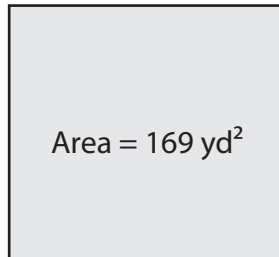
Side Length of a Square

Find the side length of each square using the given area.

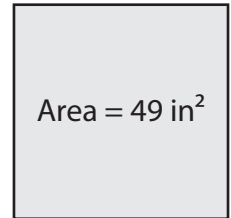
1)



2)



3)



Side

Preview

4)

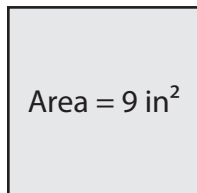
Become a member to unlock
unrestricted access to both printable
and online worksheets.

Side

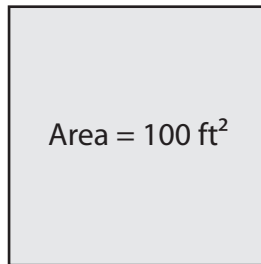
www.tutoringhour.com



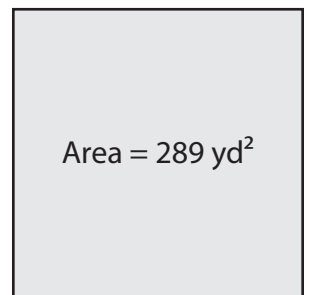
7)



8)



9)



Side length = _____

Side length = _____

Side length = _____