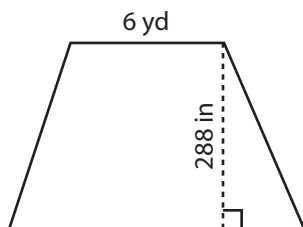


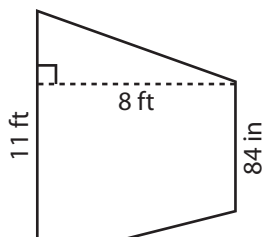
# Area of a Trapezoid

Find the area of each trapezoid.

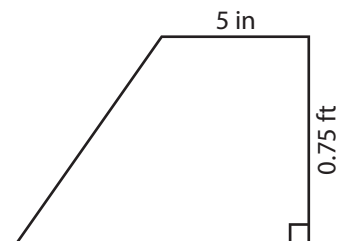
1)



2)



3)



Ar

# Preview

4)

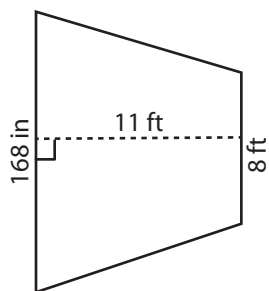
Become a member to unlock  
unrestricted access to both printable  
and online worksheets.



[www.tutoringhour.com](http://www.tutoringhour.com)

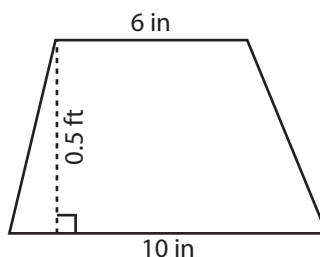
Ar

7)



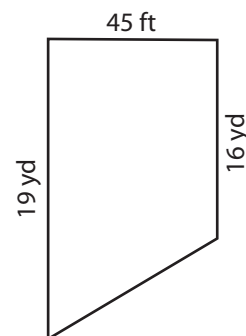
Area = \_\_\_\_\_ ft<sup>2</sup>

8)



Area = \_\_\_\_\_ in<sup>2</sup>

9)



Area = \_\_\_\_\_ yd<sup>2</sup>