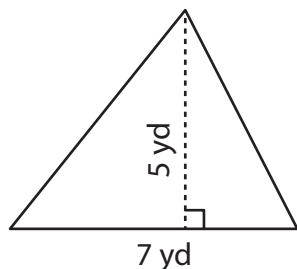


Area of Triangles | Integers

Answer Key

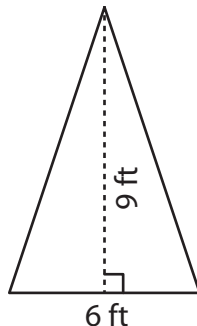
Find the area of each triangle.

1)



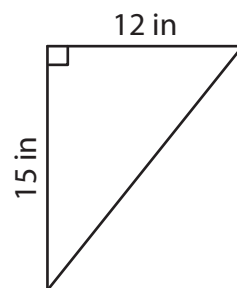
Area = 17.5 yd²

2)



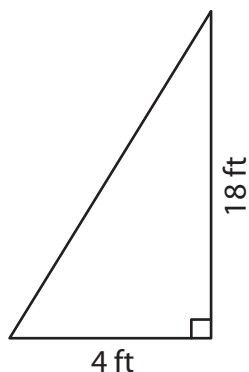
Area = 27 ft²

3)



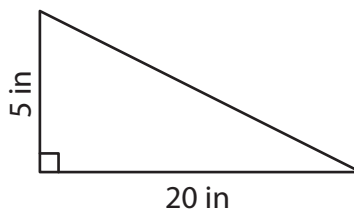
Area = 90 in²

4)



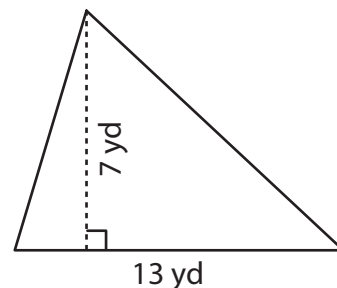
Area = 36 ft²

5)



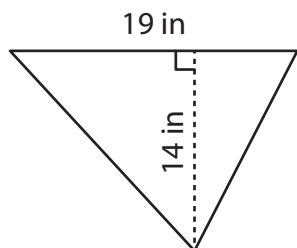
Area = 50 in²

6)



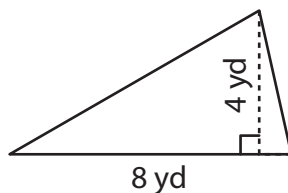
Area = 45.5 yd²

7)



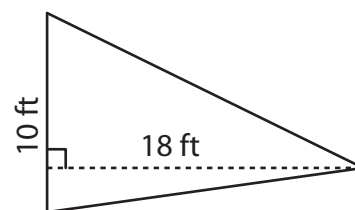
Area = 133 in²

8)



Area = 16 yd²

9)



Area = 90 ft²