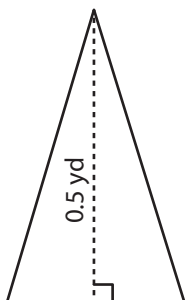


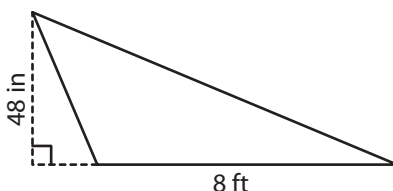
Area of Triangles | Unit Conversion

Find the area of each triangle.

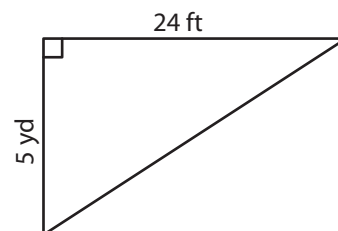
1)



2)



3)



Preview

Become a member to unlock
unrestricted access to both printable
and online worksheets.

www.tutoringhour.com



4)

7)

be the area of this garden bed:

_____ square feet

8) Natalic has a triangular piece of fabric. Find the area of this piece whose base and height are 2 yards and 3 feet respectively.

_____ square yards