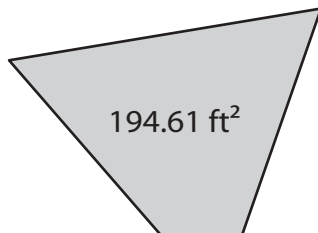


Area of Equilateral Triangles

Find the side length of each equilateral triangle using the given area.
Round your answer to the nearest tenth.

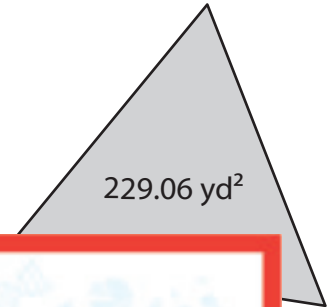
1)



2)



3)



4)

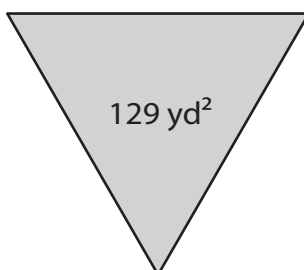
Preview

Become a member to unlock
unrestricted access to both printable
and online worksheets.

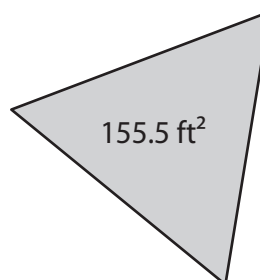


www.tutoringhour.com

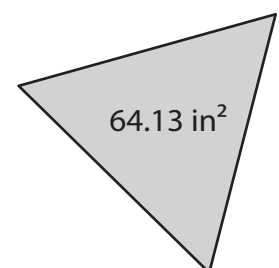
7)



8)



9)



Side length = _____

Side length = _____

Side length = _____