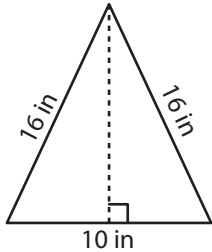


Area of Isosceles Triangles | Integers

Answer Key

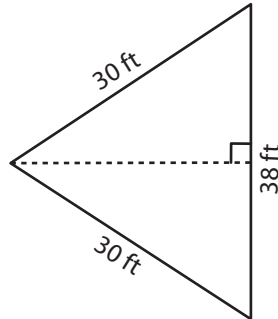
Find the area of each isosceles triangle. Round your answer to two decimal places.

1)



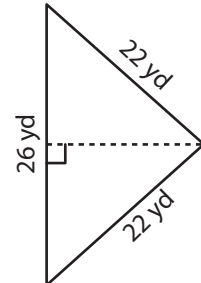
Area = **75.99 in²**

2)



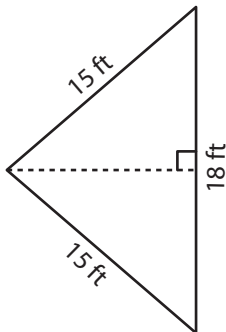
Area = **441.11 ft²**

3)



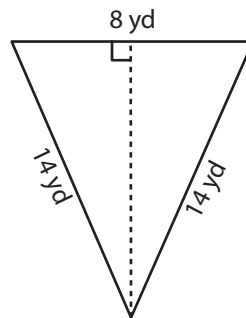
Area = **230.73 yd²**

4)



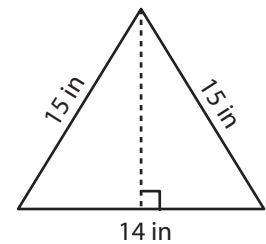
Area = **108 ft²**

5)



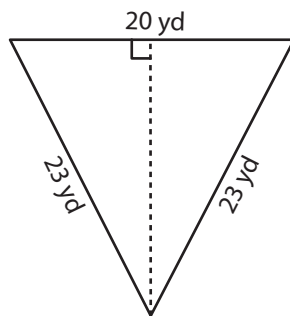
Area = **53.67 yd²**

6)



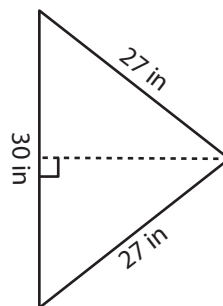
Area = **92.87 in²**

7)



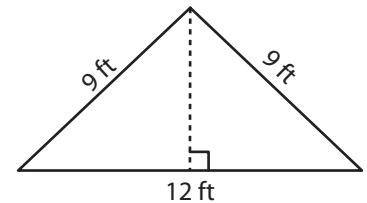
Area = **207.12 yd²**

8)



Area = **336.75 in²**

9)



Area = **40.25 ft²**