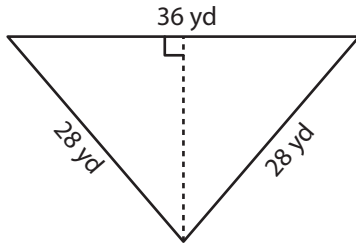


Area of Isosceles Triangles | Integers

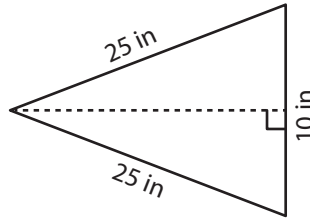
Find the area of each isosceles triangle. Round your answer to two decimal places.

1)



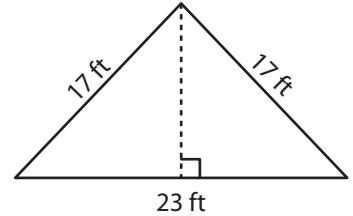
Area = _____

2)



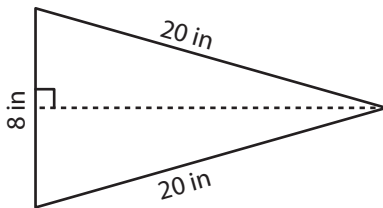
Area = _____

3)



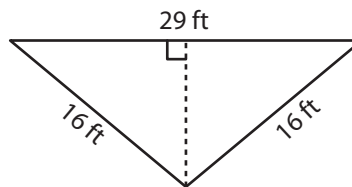
Area = _____

4)



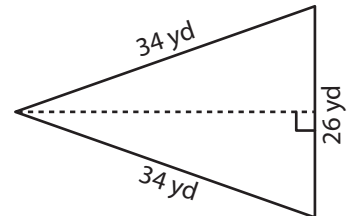
Area = _____

5)



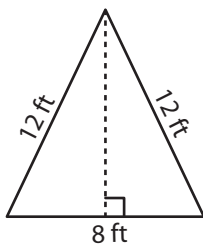
Area = _____

6)



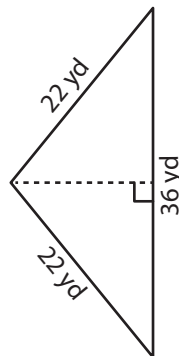
Area = _____

7)



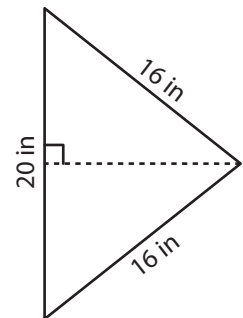
Area = _____

8)



Area = _____

9)



Area = _____