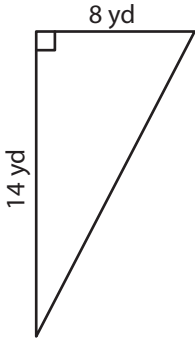


Area of Right Triangles | Integers

Answer Key

Find the area of each right triangle.

1)



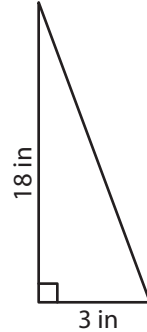
Area = 56 yd²

2)



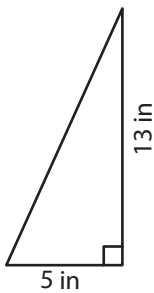
Area = 51 ft²

3)



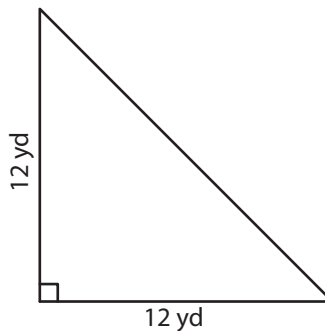
Area = 27 in²

4)



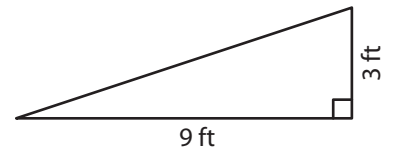
Area = 32.5 in²

5)



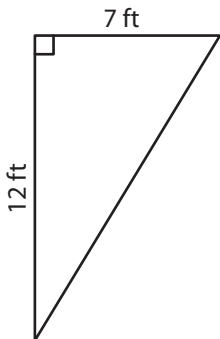
Area = 72 yd²

6)



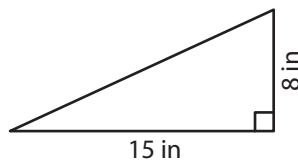
Area = 13.5 ft²

7)



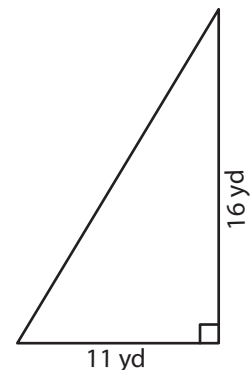
Area = 42 ft²

8)



Area = 60 in²

9)



Area = 88 yd²