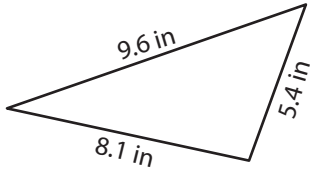


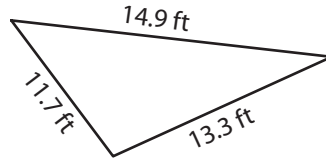
## Area of Scalene Triangles | Decimals

Find the area of each scalene triangle. Round your answer to two decimal places.

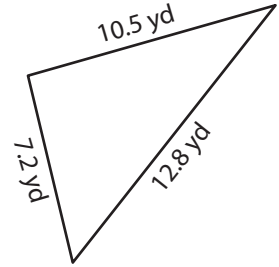
1)



2)



3)



# Preview

Become a member to unlock  
unrestricted access to both printable  
and online worksheets.



[www.tutoringhour.com](http://www.tutoringhour.com)

- 7) Melinda ordered a triangle-shaped table for her living room. If the top of the table measured 3.2 feet, 4.6 feet, and 3.5 feet on its sides, what was the area?