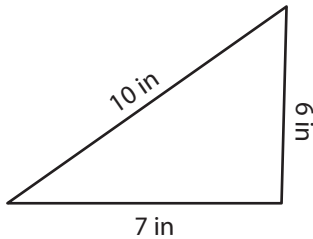


Area of Scalene Triangles | Integers

Answer Key

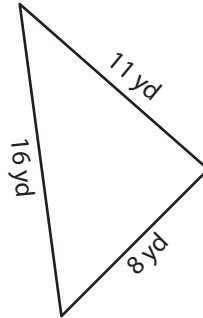
Find the area of each scalene triangle. Round your answer to two decimal places.

1)



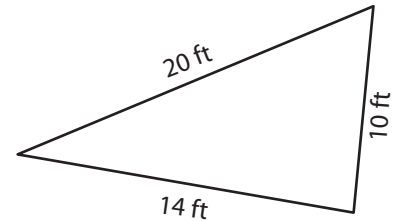
Area = 20.66 in²

2)



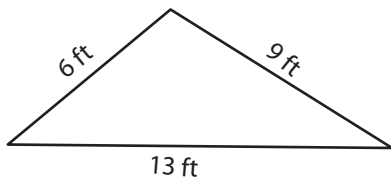
Area = 40.26 yd²

3)



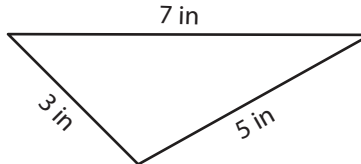
Area = 64.99 ft²

4)



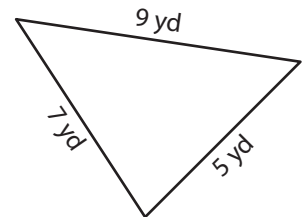
Area = 23.66 ft²

5)



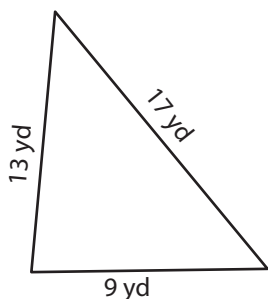
Area = 6.5 in²

6)



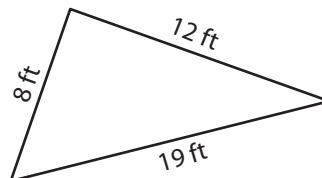
Area = 17.41 yd²

7)



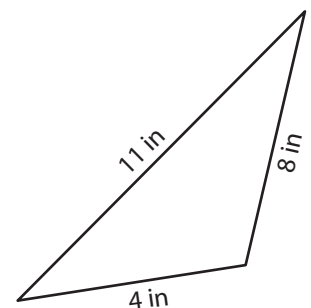
Area = 57.68 yd²

8)



Area = 29 ft²

9)



Area = 12.29 in²