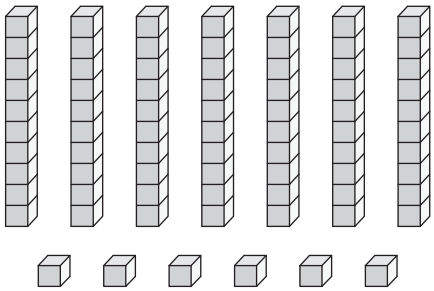
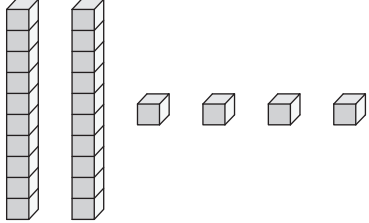
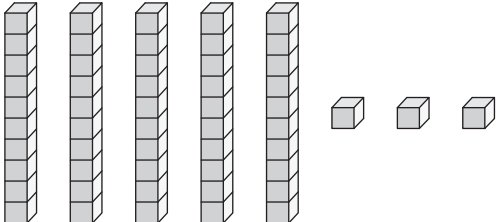
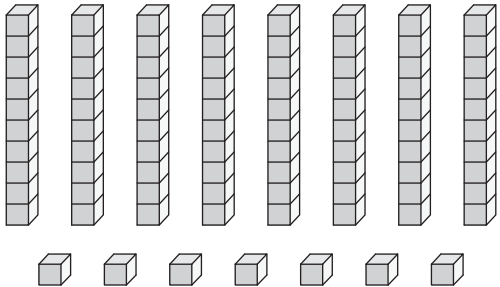
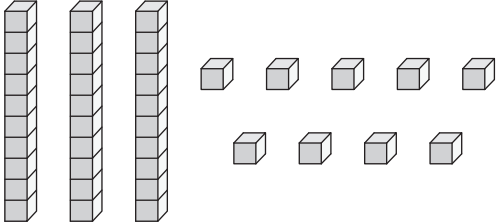
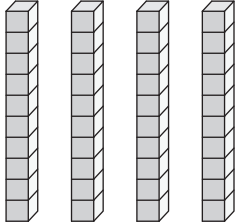
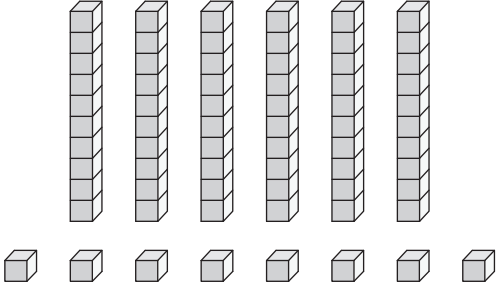
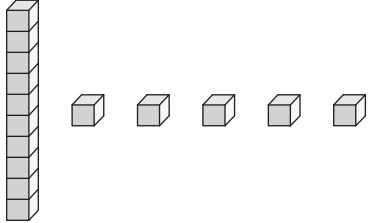


# Base Ten Blocks

Answer Key

Write the number formed by each set of base ten blocks.

|  |  |
|--|--|
| <p>1)</p>  <p style="text-align: center;"><b>76</b></p>   | <p>2)</p>  <p style="text-align: center;"><b>24</b></p>    |
| <p>3)</p>  <p style="text-align: center;"><b>53</b></p>   | <p>4)</p>  <p style="text-align: center;"><b>87</b></p>   |
| <p>5)</p>  <p style="text-align: center;"><b>39</b></p> | <p>6)</p>  <p style="text-align: center;"><b>40</b></p> |
| <p>7)</p>  <p style="text-align: center;"><b>68</b></p> | <p>8)</p>  <p style="text-align: center;"><b>15</b></p>  |