



Base Ten Blocks

Write the number formed by each set of base ten blocks.



3

Preview

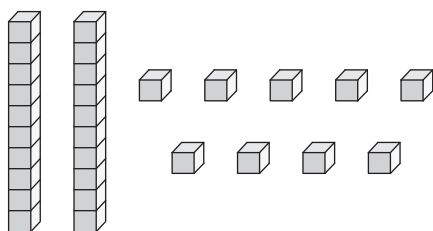
Become a member to unlock
unrestricted access to both printable
and online worksheets.



www.tutoringhour.com

5

7)



8)

