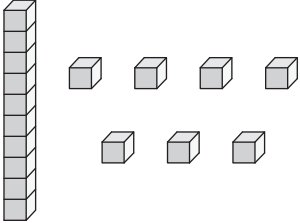
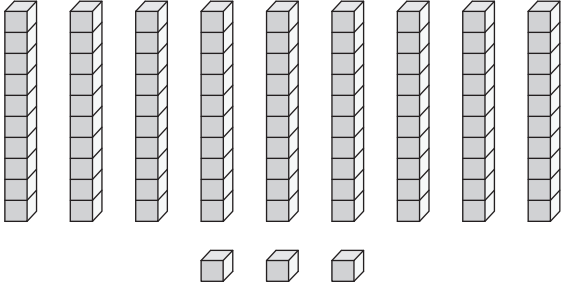
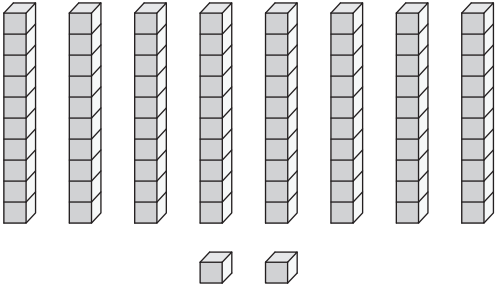
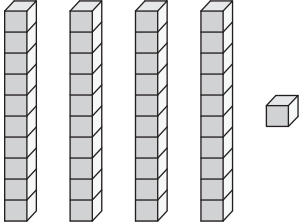

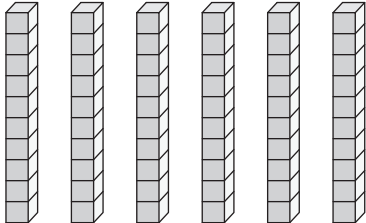
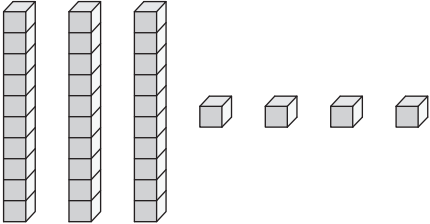
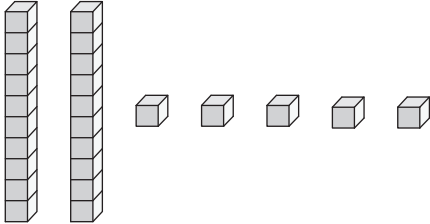


Base Ten Blocks

Answer Key

Write the number formed by each set of base ten blocks.

<p>1)</p>  <p style="text-align: center;">17</p>	<p>2)</p>  <p style="text-align: center;">93</p>
<p>3)</p>  <p style="text-align: center;">82</p>	<p>4)</p>  <p style="text-align: center;">41</p>
<p>5)</p>  <p style="text-align: center;">59</p>	<p>6)</p>  <p style="text-align: center;">60</p>
<p>7)</p>  <p style="text-align: center;">34</p>	<p>8)</p>  <p style="text-align: center;">25</p>