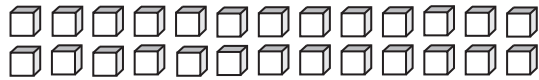


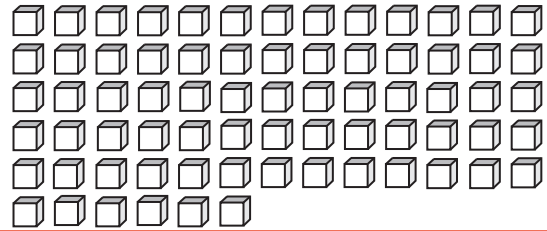
# Base Ten Blocks

Count the base ten blocks. Write the number of tens that can be formed and the left over ones.

1)



2)



3)

## Preview

Become a member to unlock  
unrestricted access to both printable  
and online worksheets.



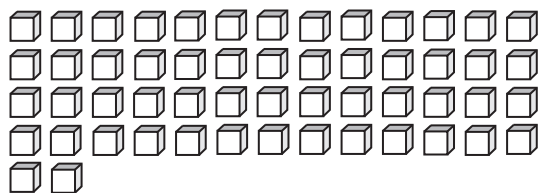
[www.tutoringhour.com](http://www.tutoringhour.com)

5)

\_\_\_\_ tens \_\_\_\_ ones

\_\_\_\_ tens \_\_\_\_ ones

7)



\_\_\_\_ tens \_\_\_\_ ones

8)



\_\_\_\_ tens \_\_\_\_ ones