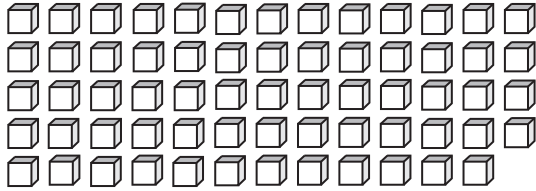


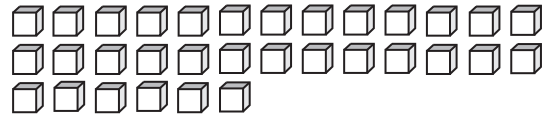
Base Ten Blocks

Count the base ten blocks. Write the number of tens that can be formed and the left over ones.

1)



2)



3)

Preview

Become a member to unlock
unrestricted access to both printable
and online worksheets.



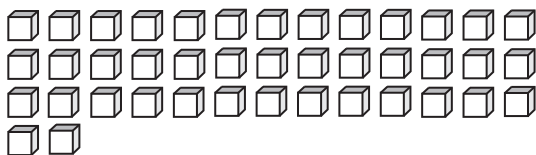
www.tutoringhour.com

5)

_____ tens _____ ones

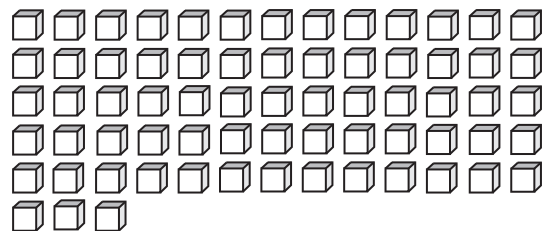
_____ tens _____ ones

7)



_____ tens _____ ones

8)



_____ tens _____ ones