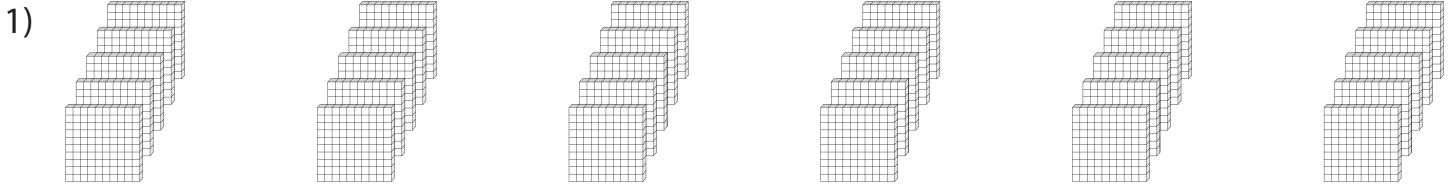


# Base Ten Blocks

Count the base ten blocks. Write the number of thousands that can be formed and the left over hundreds.



\_\_\_\_\_ thousands    \_\_\_\_\_ hundreds

2)

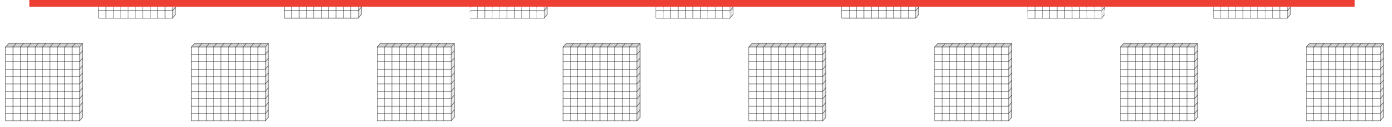
## Preview

Become a member to unlock  
unrestricted access to both printable  
and online worksheets.

www.tutoringhour.com

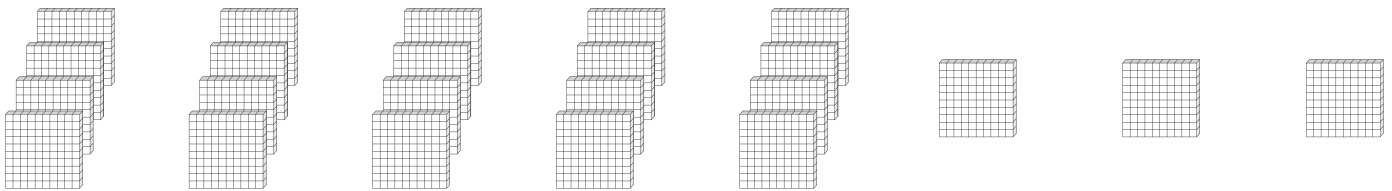
3)

4)



\_\_\_\_\_ thousands    \_\_\_\_\_ hundreds

5)



\_\_\_\_\_ thousands    \_\_\_\_\_ hundreds