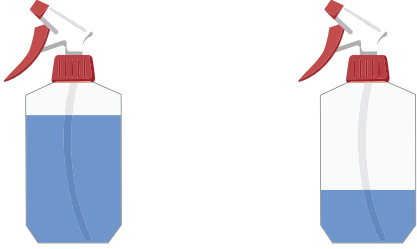



Comparing Liquid Volumes

A) Compare the liquid volumes of the containers and label them as "more" or "less".

1)



2)



B) S

1) B


Preview

Become a member to unlock
unrestricted access to both printable
and online worksheets.

www.tutoringhour.com



C) 1







2) Write 1, 2, and 3 to order the mugs from most to least based on the volume of coffee they contain.





