



# Comparing Liquid Volumes

1) Check the container that holds less.



2) Check the container that holds more.



3) Check the container that holds less.

ess.

## Preview

Become a member to unlock  
unrestricted access to both printable  
and online worksheets.




[www.tutoringhour.com](http://www.tutoringhour.com)

5) Check the container that holds more.

more.

Identify which objects hold more and which ones hold less, and sort them accordingly.

1)



fish tank



fishbowl

2)



cup



kettle

Holds More	Holds Less

Holds More	Holds Less