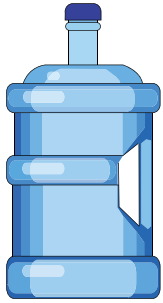



# Comparing Liquid Volumes

1) Check the container that holds more.



2) Check the container that holds more.



3) C

ess.

## Preview

Become a member to unlock  
unrestricted access to both printable  
and online worksheets.




5) C


more.

Identify which objects hold more and which ones hold less, and sort them accordingly.

1)

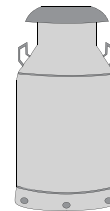


jug



glass

2)



milk can



milk bottle

Holds More	Holds Less

Holds More	Holds Less